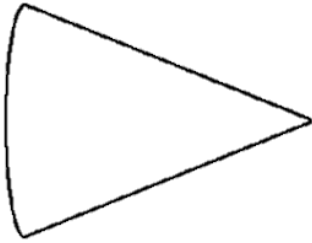


# Solid Shape

Q. Fill in the name, number of edges, vertices and faces of each shape.

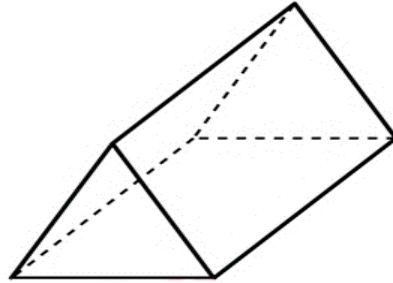


Name: \_\_\_\_\_

No. of edges: \_\_\_\_\_

No. of vertices: \_\_\_\_\_

No. of faces: : \_\_\_\_\_

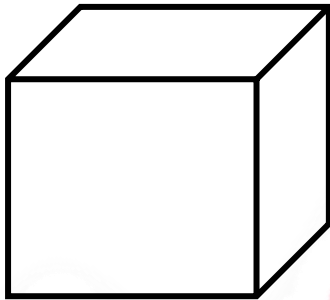


Name: \_\_\_\_\_

No. of edges: \_\_\_\_\_

No. of vertices: \_\_\_\_\_

No. of faces: : \_\_\_\_\_

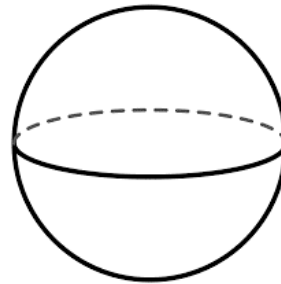


Name: \_\_\_\_\_

No. of edges: \_\_\_\_\_

No. of vertices: \_\_\_\_\_

No. of faces: : \_\_\_\_\_

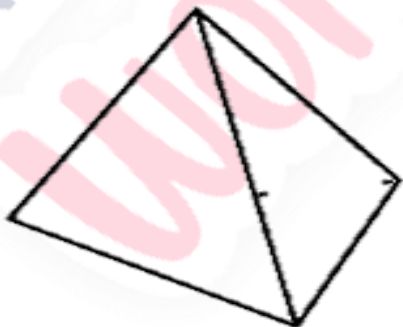


Name: \_\_\_\_\_

No. of edges: \_\_\_\_\_

No. of vertices: \_\_\_\_\_

No. of faces: : \_\_\_\_\_

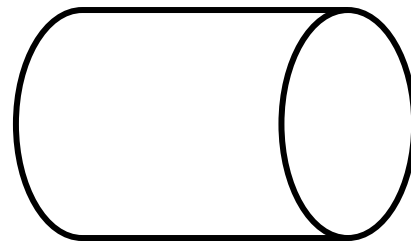


Name: \_\_\_\_\_

No. of edges: \_\_\_\_\_

No. of vertices: \_\_\_\_\_

No. of faces: : \_\_\_\_\_



Name: \_\_\_\_\_

No. of edges: \_\_\_\_\_

No. of vertices: \_\_\_\_\_

No. of faces: : \_\_\_\_\_