


Measurement (Time)

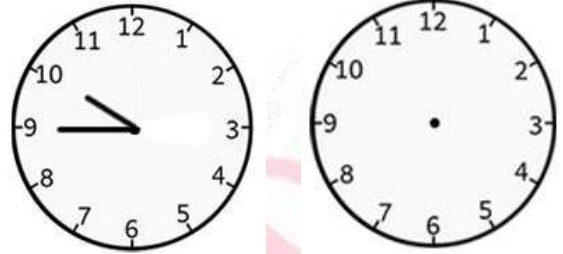
Q. Draw the clock hands to show the time it will be after the time given.

1.




What time it will be after 2 hours 30 minutes?

2.



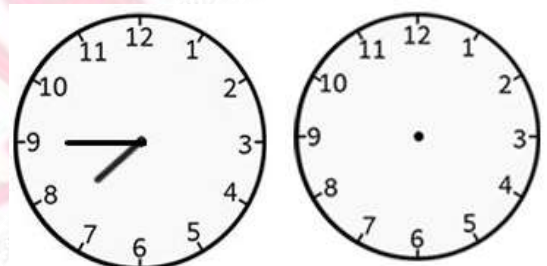
What time it will be after 4 hours 15 minutes?

3.




What time it will be after 5 hours 45 minutes?

4.




What time it will be after 2 hours 30 minutes?

5.



What time it will be after 6 hours 10 minutes?

6.



What time it will be after 1 hours 30 minutes?