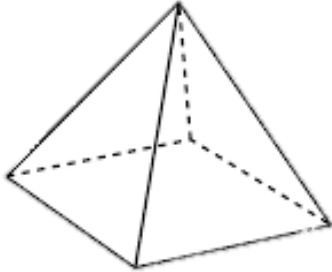


Solid Shape

Q. Fill in the name, number of edges, vertices and faces of each shape.




Name: _____

No. of edges: _____

No. of vertices: _____

No. of faces: : _____

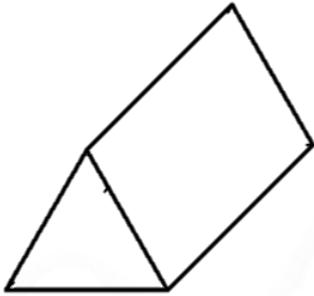


Name: _____

No. of edges: _____

No. of vertices: _____

No. of faces: : _____

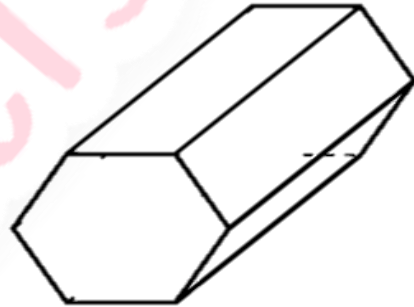


Name: _____

No. of edges: _____

No. of vertices: _____

No. of faces: : _____

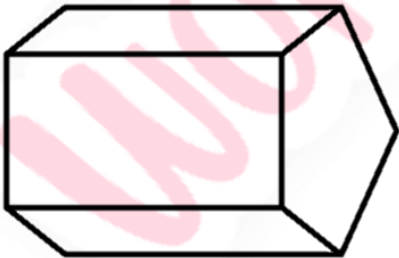


Name: _____

No. of edges: _____

No. of vertices: _____

No. of faces: : _____

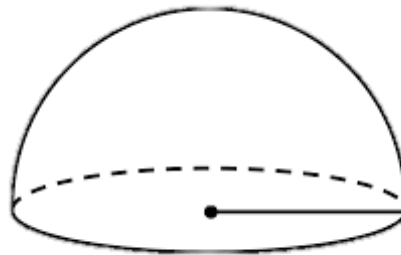


Name: _____

No. of edges: _____

No. of vertices: _____

No. of faces: : _____



Name: _____

No. of edges: _____

No. of vertices: _____

No. of faces: : _____