






# Money

Q. Count the given coins and write in cents.

A penny is worth 1 cent.  
A dime is worth 10 cents.

A nickel is worth 5 cents.  
A quarter is worth 25 cents.

|   |  |                    |
|---|--|--------------------|
| 1 |    | <hr/> <p>Cents</p> |
| 2 |   | <hr/> <p>Cents</p> |
| 3 |  | <hr/> <p>Cents</p> |
| 4 |  | <hr/> <p>Cents</p> |
| 5 |  | <hr/> <p>Cents</p> |