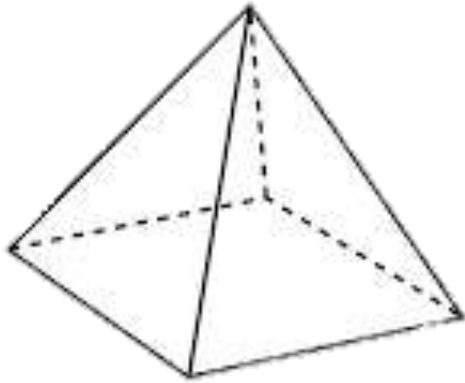


Solid Shape

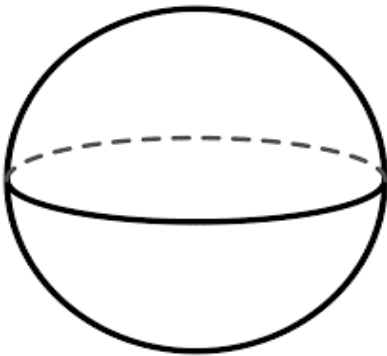
Q. Identify each shape as 2D or 3D and tick the correct option.




| | |
|----|----|
| 2D | 3D |
|----|----|




| | |
|----|----|
| 2D | 3D |
|----|----|



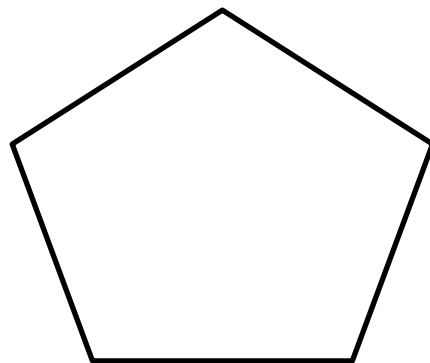
| | |
|----|----|
| 2D | 3D |
|----|----|



| | |
|----|----|
| 2D | 3D |
|----|----|



| | |
|----|----|
| 2D | 3D |
|----|----|



| | |
|----|----|
| 2D | 3D |
|----|----|