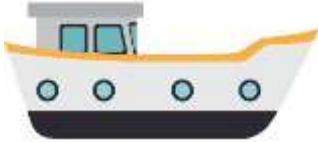







Transportation

Q: Look at the pictures below and tell which type of transport is this, Circle “L” for Land, “W” for Water and “A” for Air transport:

<p>ship</p> 	<p>car</p> 	<p>rocket</p> 
<p>L / W / A</p>	<p>A / L / W</p>	<p>W / A / L</p>

<p>bus</p> 	<p>aeroplane</p> 	<p>submarine</p> 
<p>W / A / L</p>	<p>W / L / A</p>	<p>A / L / W</p>

<p>speed boat</p> 	<p>truck</p> 	<p>hot air balloon</p> 
<p>A / L / W</p>	<p>L / A / W</p>	<p>L / W / A</p>